

Year 2 Home Learning Quiz

Friday 26th June 20 mins

Spell the following words

- | | |
|----|-----------|
| 1) | past |
| 2) | whole |
| 3) | everybody |
| 4) | hour |
| 5) | would |
| 6) | improve |

7) Explain what an adjective is.


8) What job do conjunctions have?

9) Tell me what book you liked the best, try and use conjunctions (because, but etc)

10) Describe your favourite character using adjectives.

11)


What time does the clock show?



:00

11 'o' clock.

12) Draw the hands on the clock face.



13) It may help you to use the clock in question 12) to help you find the answer.



Rosie

If you add three hours onto the current time, the amount of minutes to/past the hour do not change.

Do you agree with Rosie? Prove it.

A machine fills one box every minute.
How many boxes does it fill in one hour?

14)



_____ boxes

15)

Match each time to the time shown on the clock.



9 o'clock



half past 12



half past 9



6 o'clock





16)

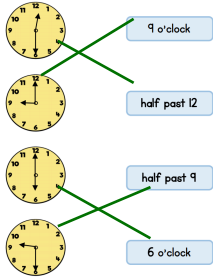
$$9 \times 5 =$$

17)

$$6 \times 5 =$$

18) What was the name of the prophet who was asked to sacrifice his son?	
19) Write a sentence and tell me who you would go to if you were worried in school.	
20) Looking at technology, what category would an iPad, games console and a computer go in?	

1) - 6) - spellings	
7) Explain what an adjective is.	An adjective is a word used to describe a noun.
8) What job do conjunctions do?	Conjunctions join two or more sentences together.
9) Tell me what book you liked the best, try and use conjunctions (because, but etc)	Any sentence containing, and / but or because. As long as they have used an alternative connective or conjunction, this is fine!
10) Describe your favourite character using adjectives.	Are the adjectives appropriate to the sentence and the character they are describing?
11)	<p>What time does the clock show?</p>  <p>8:00</p>
12). Draw the hands on the clock face.	<p>11 'o' clock.</p> 
13) It may help you to use the clock in question 12) to help you find the answer.	<p>Yes, Rosie is right as it is only the hour that has changed and not the minutes. Your child may have drawn a clock to help them arrive at their answer.</p>  <p>Rosie</p> <p>If you add three hours onto the current time, the amount of minutes to/past the hour do not change.</p> <p>Do you agree with Rosie? Prove it.</p>
14)x	<p>A machine fills one box every minute. How many boxes does it fill in one hour?</p> <p>60minutes = 1 hour 60 x 1 = 60</p>  <p>60 boxes</p>

15)	<p>Match each time to the time shown on the clock.</p> 
16)	$40 \div 5 = 8$
17)	$12 \times 10 = 120$
18) What was the name of the prophet who was asked to sacrifice his son?	The Prophet's name was Ibrahim.
19) Write a sentence and tell me who you would go to if you were worried in school.	You could go to your class teacher, TA or adult in school and they will listen to you and support you.
20) Looking at technology, what category would an iPad, games console and a computer go in?	They would go in the entertainment category as they all use technology that we can play with.