

Year 2 Home Learning Quiz

Friday 10th July 15 mins

Spell the following words

1) break

2) climb

3) great

4) hold

5) most

6) plant

7) Underline the adjectives in the sentence.

The tall, stone tower loomed over the small, woodland animals.

8) Write 4 adjectives to describe this magical forest.




9) Write a 2A sentence using the adjectives from Q8.

10) $36 \div 3 =$

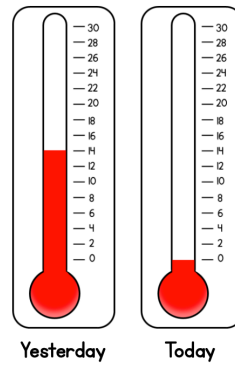
11) What is the temperature?

What is the temperature?



°C

12).



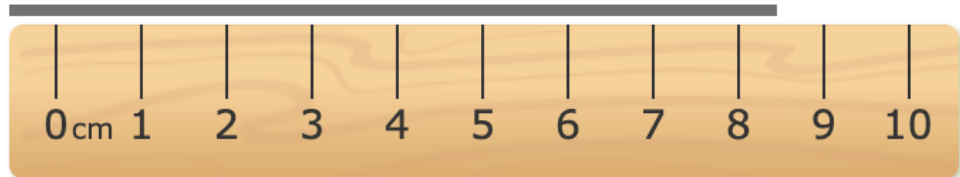
What was the temperature yesterday?

_____ °C

Today, the temperature is 8 degrees warmer than it was yesterday.

Shade the thermometer to show this.

13) What is wrong with my measuring?




14) Measure the line.



15)

Circle the objects that you would measure in metres. Tick the objects that you would measure in centimetres.



CHALLENGE!

16). Use drawings to help and remember to underline the important information!

There are 3 teddies in a box.

The brown teddy is 15 cm taller than the yellow teddy.

The yellow teddy is 3 cm shorter than the pink teddy.

The pink teddy is 42 cm tall.

How tall are the brown and yellow teddies?

How much taller is the brown teddy than the pink teddy?

17 Look at the objects, which ones need to be weighed in grams or kilograms? Write g or Kg next to the picture.



18) Write a sentence explaining why Muslims go on a pilgrimage?

19) Name 1 of the food categories that are in the Eat Well guide.

20) Write a sentence explaining what happens to the heart when you exercise.

1) - 6) -
spellings

7)
Underline the
adjectives in the
sentence.

The tall, stone tower loomed over the small, woodland animals.

8) Write 4
adjectives to
describe this
magical forest.

Use your
judgement to the
appropriateness of
the adjectives
chosen.



9) Write a 2A
sentence using
the adjectives
from Q8.

10)

$$36 \div 3 = 12$$

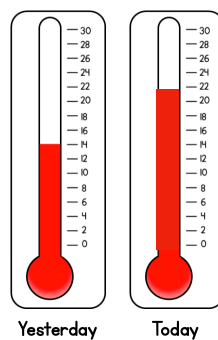
11) What is the
temperature?

What is the temperature?



30 °C

12).



What was the temperature yesterday?

14 °C

Today, the temperature is 8 degrees warmer than it was yesterday.

Shade the thermometer to show this.

13) What is wrong with my measuring?




The 0cm line on the ruler is not lined up with the start of the line I am measuring!

14) Measure the line.

_____ 8cm (answers may vary depending on printing - adult to check)

15)

Circle the objects that you would measure in metres. Tick the objects that you would measure in centimetres.



16).

The yellow teddy is
39 cm tall.

The brown teddy is
54 cm tall.

The brown teddy is
12 cm taller.

17 Look at the
objects, which
ones need to be
weighed in
grams or
kilograms?
Write g or Kg
next to the
picture.



Kg



g



g

18) Write a
sentence
explaining why
Muslims go on
a pilgrimage?

The answer will vary from household. An example: Muslims go on a pilgrimage to give thanks to God, ask for help or to ask for forgiveness.

19) Name 1 of
the food
categories that
are in the Eat
Well guide.

You can have any of the following: carbohydrates, dairy, fruit/veg, meat and pulses, oil/spreads and water.

20) Write a
sentence
explaining what
happens to the
heart when you
exercise.

There are a variety of possible answers!

- When you exercise the heart gets stronger which makes it more efficient in pumping blood round your body.
- The heart beats faster when you exercise.